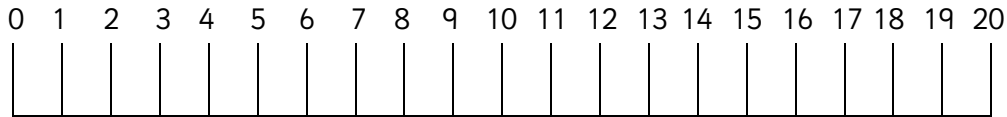


Use the number line to help with taking away from these teen numbers.



1. $13 - 3 =$

2. $15 - 2 =$

3. $18 - 6 =$

4. $14 - 8 =$

5. $17 - 5 =$


6. $19 - 11 =$

7. Take 3 from 16

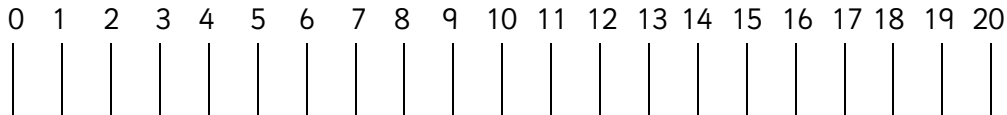
8. Take 2 from 13

9. Take 9 from 15

10. Take 4 from 14



Use the number line to help with taking away from these teen numbers.



1. $13 - 11 =$

2. $16 - 8 =$

3. $19 - 6 =$

4. $17 - 7 =$

5. $13 - 9 =$


6. $18 - 12 =$

7. Take 4 from 16

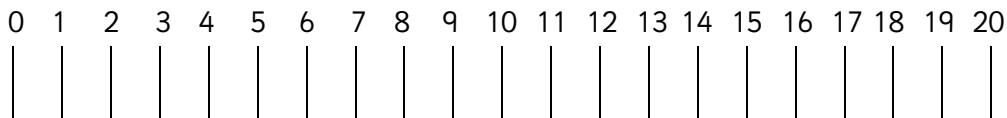
8. Take 7 from 19

9. Take 4 from 14

10. Take 8 from 15



Use the number line to help with taking away from these teen numbers.



1. $19 - 12 =$

2. $17 - 15 =$

3. $14 - 10 =$

4. $16 - 13 =$

5. $15 - 15 =$


6. $13 - 12 =$

7. Take 7 from 18

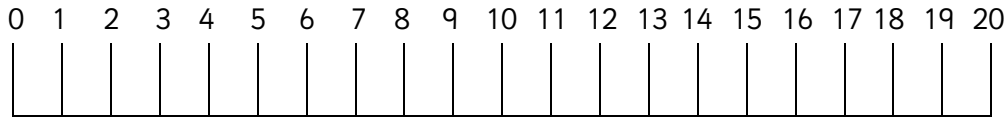
8. Take 5 from 13

9. Take 6 from 16

10. Take 8 from 17



Use the number line to help with taking away from these teen numbers.



1. $13 - 10 =$

2. $15 - 4 =$

3. $16 - 11 =$

4. $18 - 13 =$

5. $19 - 16 =$

6. $14 - 9 =$

7. Take 5 from 19

8. Take 13 from 15

9. Take 3 from 17

10. Take 9 from 19



Answers

Page 1

1. 10 2. 13 3. 12 4. 6 5. 12
6. 8 7. 13 8. 11 9. 6 10. 10

Page 2

1. 2 2. 8 3. 13 4. 10 5. 4
6. 6 7. 12 8. 12 9. 10 10. 7

Page 3

1. 7 2. 2 3. 4 4. 3 5. 0
6. 1 7. 11 8. 8 9. 10 10. 9

Page 4

1. 3 2. 11 3. 5 4. 5 5. 3
6. 5 7. 14 8. 2 9. 14 10. 10