

Today we are just adding even numbers. Use the number line to help you work out the missing numbers.

1. $10 + 8 + \square = 20$

2. $12 + 2 + \square = 20$

3. $10 + 4 + \square = 20$

4. $12 + 6 + \square = 20$

5. $10 + 6 + \square = 20$

6. $12 + 4 + \square = 20$



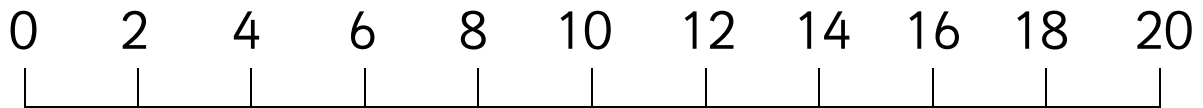
Find the missing numbers below.
They are all even.

7. $8 + \square + 8 = 20$

8. $\square + 8 + 4 = 20$

9. $6 + \square + 12 = 20$

10. $\square + 12 + 2 = 20$



Some more adding even numbers to make a total of 20. Use the number line to help you.

1. $2 + 2 + \square = 20$ 2. $8 + 10 + \square = 20$

3. $4 + 6 + \square = 20$ 4. $14 + 2 + \square = 20$

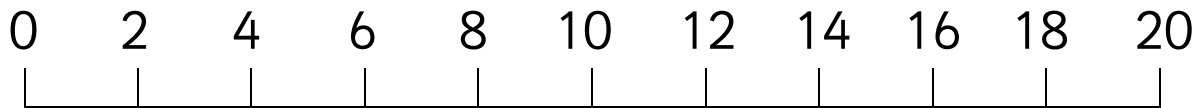
5. $6 + 8 + \square = 20$ 6. $6 + 6 + \square = 20$



Find the missing numbers below.
They are all even.

7. $2 + \square + 10 = 20$ 8. $\square + 4 + 4 = 20$

9. $2 + \square + 12 = 20$ 10. $\square + 8 + 2 = 20$



Only even numbers today: nice and easy.

Use the number line to help you.

1. $2 + 6 + \square = 20$ 2. $4 + 10 + \square = 20$

3. $6 + 4 + \square = 20$ 4. $10 + 2 + \square = 20$

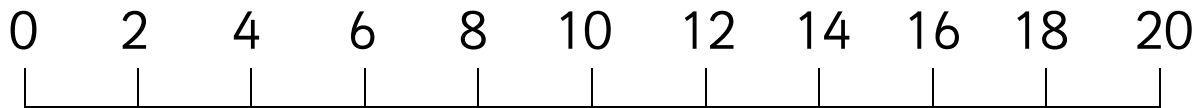
5. $6 + 8 + \square = 20$ 6. $14 + 4 + \square = 20$



Find the missing numbers below.
They are all even.

7. $8 + \square + 2 = 20$ 8. $\square + 6 + 8 = 20$

9. $6 + \square + 6 = 20$ 10. $\square + 2 + 2 = 20$



Only even numbers today: nice and easy.

Use the number line to help you.

1. $2 + 4 + \square = 20$ 2. $2 + 10 + \square = 20$

3. $4 + 8 + \square = 20$ 4. $16 + 2 + \square = 20$

5. $4 + 2 + \square = 20$ 6. $8 + 10 + \square = 20$



Find the missing numbers below.
They are all even.

7. $4 + \square + 4 = 20$ 8. $\square + 10 + 2 = 20$

9. $6 + \square + 6 = 20$ 10. $\square + 8 + 4 = 20$



Answers

Page 1

- | | | | | |
|------|------|------|------|-------|
| 1. 2 | 2. 6 | 3. 6 | 4. 2 | 5. 4 |
| 6. 6 | 7. 4 | 8. 8 | 9. 2 | 10. 6 |

Page 2

- | | | | | |
|-------|------|-------|------|--------|
| 1. 16 | 2. 2 | 3. 10 | 4. 4 | 5. 6 |
| 6. 8 | 7. 8 | 8. 12 | 9. 6 | 10. 10 |

Page 3

- | | | | | |
|-------|-------|-------|------|--------|
| 1. 12 | 2. 6 | 3. 10 | 4. 8 | 5. 6 |
| 6. 2 | 7. 10 | 8. 6 | 9. 8 | 10. 16 |

Page 4

- | | | | | |
|-------|-------|------|------|-------|
| 1. 14 | 2. 8 | 3. 8 | 4. 2 | 5. 14 |
| 6. 2 | 7. 12 | 8. 8 | 9. 8 | 10. 8 |