



The chickens are counting up. Fill in the missing numbers.

Four white chickens are shown in a row. Each chicken has a thought bubble above it:

- Chicken 1: Thought bubble contains the number 6.
- Chicken 2: Thought bubble is empty.
- Chicken 3: Thought bubble is empty.
- Chicken 4: Thought bubble contains the number 9.

Four brown chickens are shown in a row. Each chicken has a thought bubble above it:

- Chicken 1: Thought bubble is empty.
- Chicken 2: Thought bubble contains the number 5.
- Chicken 3: Thought bubble is empty.
- Chicken 4: Thought bubble contains the number 7.

Four yellow chickens are shown in a row. Each chicken has a thought bubble above it:

- Chicken 1: Thought bubble contains the number 7.
- Chicken 2: Thought bubble is empty.
- Chicken 3: Thought bubble contains the number 9.
- Chicken 4: Thought bubble is empty.









The chickens are counting up. Fill in the missing numbers.









Four cartoon chickens are shown in a row. Above each chicken is a thought bubble. The first bubble is empty. The second bubble is empty. The third bubble contains the number 4. The fourth bubble contains the number 5.









Four cartoon chickens are shown in a row. Above each chicken is a thought bubble. The first bubble contains the number 6. The second bubble is empty. The third bubble is empty. The fourth bubble contains the number 9.

Four cartoon chickens are shown in a row. Above each chicken is a thought bubble. The first bubble contains the number 0. The second bubble contains the number 1. The third bubble is empty. The fourth bubble is empty.

The chickens are counting up. Fill in the missing numbers.

Answers:

Page 1

Counting up in ones – chickens  
Maths worksheets from urbrainy.com

The chickens are counting up. Fill in the missing numbers.

0 1 2 3

5 6 7 8

3 4 5 6

Name: Page 1

Page 2

Counting up in ones – chickens  
Maths worksheets from urbrainy.com

The chickens are counting up. Fill in the missing numbers.

6 7 8 9

4 5 6 7

7 8 9 10

Name: Page 2

Page 3

Counting up in ones – chickens  
Maths worksheets from urbrainy.com

The chickens are counting up. Fill in the missing numbers.

2 3 4 5

6 7 8 9

0 1 2 3

Name: Page 3

Page 4

Counting up in ones – chickens  
Maths worksheets from urbrainy.com

The chickens are counting up. Fill in the missing numbers.

7 8 9 10

1 2 3 4

5 6 7 8

Name: Page 4

Name:

Page 5